
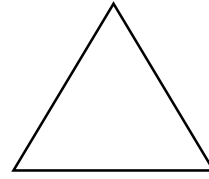





# Mathématiques



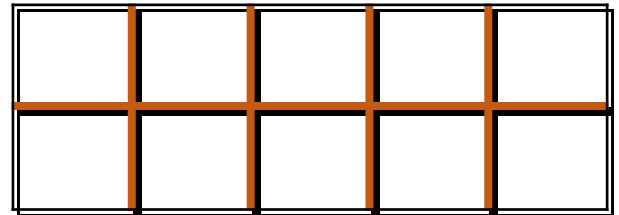
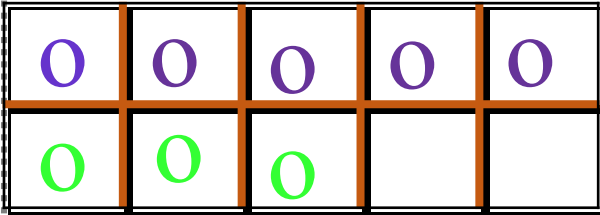
1

Dessine les jetons correspondants aux calculs.  
Calcule

exemple

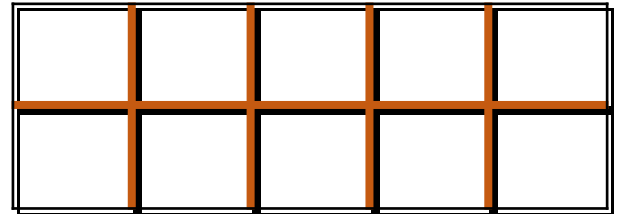
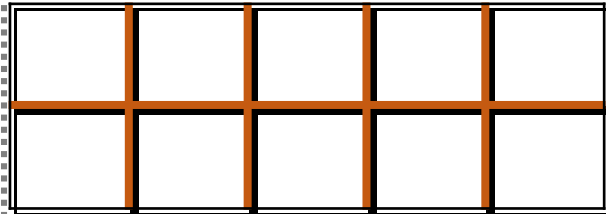
$$5 + 3 = 8$$

$$3 + 2 =$$



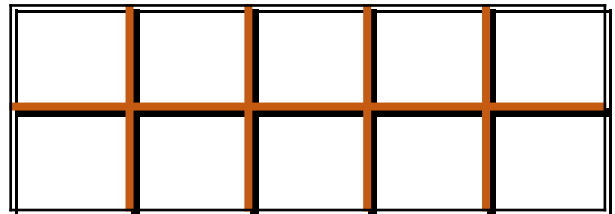
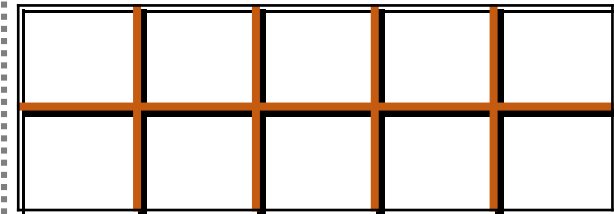
$$4 + 3 =$$

$$5 + 1 =$$



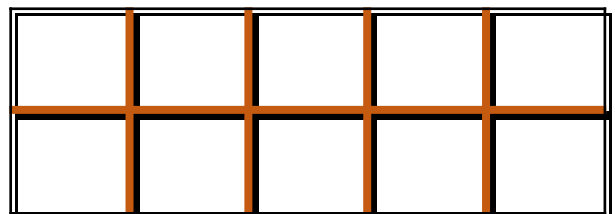
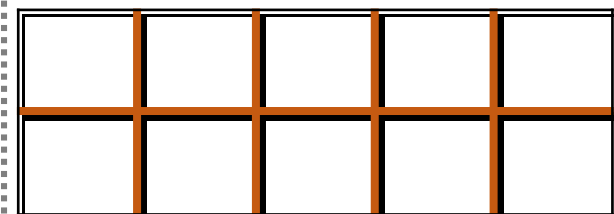
$$7 + 2 =$$

$$5 + 4 =$$


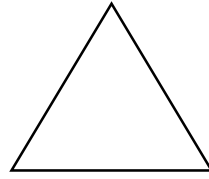





$$8 + 1 =$$

$$3 + 6 =$$



# Mathématiques



1

Dessine les jetons correspondants aux calculs.  
Calcule

EXEMPLE

$$5 - 3 = 2$$

$$3 - 2 =$$

0	0	X	X	X


$$4 - 3 =$$

$$5 - 1 =$$



$$7 - 2 =$$

$$5 - 4 =$$



$$8 - 1 =$$

$$6 - 3 =$$



